

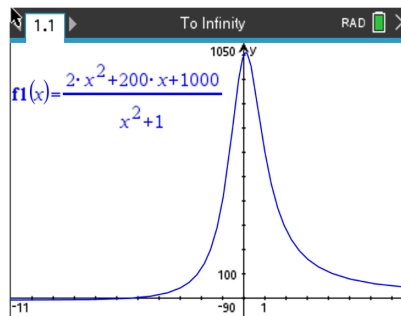


To Infinity and Beyond!

Student Activity

Name _____
Class _____

The limit of a function is the behavior the output value approaches as the input value approaches a particular value. Limits are also examined when the output value keeps increasing or decreasing without bound. In this case the notation is $\lim_{x \rightarrow \infty}()$, as is read as “the limit as the input value approaches infinity.” The limit exists when the function moves toward a single output value and fails to exist when it does not move toward one value.

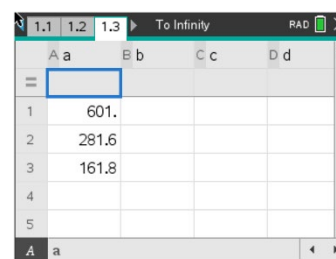
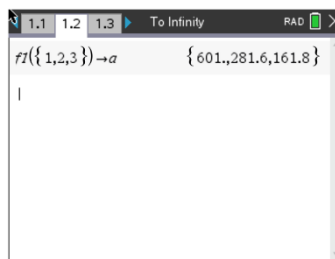
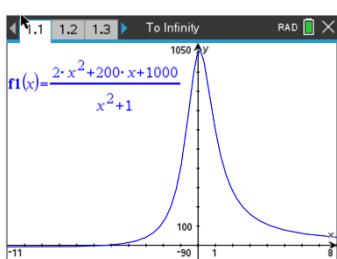


This activity has three parts. First, you will examine, graphically and numerically, the behavior of functions as the input approaches infinity. Next, you will examine graphically limits that do not exist because of continued chaotic output behavior as the input values continue to approach a particular value. Finally, you will examine a variety of limit problems.

Problem 1

Input this function into $f1(x)$ in the function bar: $f(x) = \frac{2x^2 + 200x + 1000}{x^2 + 1}$

- (a) Record the function values for the inputs {1, 2, 3}. _____
- (b) Store the output values in a list as shown:



- (c) Repeat the process for the input values {100, 200, 300}. Store the output values in **b**, and record the values.
- _____

- (d) Repeat the process for the input values {1000, 2000, 3000}. Store the output values in **c**, and record the values.
- _____



To Infinity and Beyond!
Student Activity

Name _____
Class _____

- (e) With a classmate, look at the values in all three sets and draw a conclusion regarding the behavior of the function.

- (f) To confirm your conclusion, try the input values $\{10^{10}, 10^{15}, 10^{20}\}$, and record your results.

- (g) With a classmate, discuss if the function actually reaches the exact value of the limit. Share with the class if you think this is a reasonable result.

- (h) Now let's look at the behavior graphically. Take several minutes exploring what viewing windows you would need to see the behavior from the input values listed in parts a, c, d, and f. Compare your windows on the handheld with a classmate and discuss what you notice.

- (i) Estimate: $\lim_{x \rightarrow \infty} \frac{2x^2 + 200x + 1000}{x^2 + 1}$ _____

- (j) With a classmate, investigate and draw a conclusion of the following limit:

$$\lim_{x \rightarrow -\infty} \frac{2x^2 + 200x + 1000}{x^2 + 1}$$



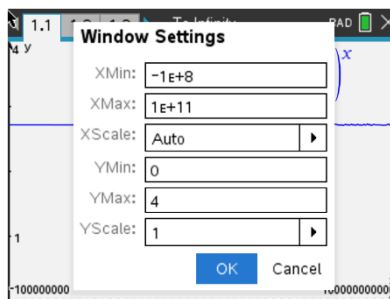
Problem 2

Now investigate the limit $\lim_{x \rightarrow \infty} \left(1 + \frac{1}{x}\right)^x$ as you did in **Problem 1**. Fill in the following table given the following input values:

X	a	X	b	X	c	X	d
1		100		1000		10^{10}	
2		200		2000		10^{15}	
3		300		3000		10^{20}	

(a) With a classmate, discuss what you notice as the input values approach infinity.

(b) Given the following viewing window, graph the function and press **menu**, **trace**, **graph trace**. This will place the trace on your curve. Press **esc** and it will leave a point the curve. Grab the point and move it to the right (toward infinity). Describe what you see.



(c) State and explain the limit: $\lim_{x \rightarrow \infty} \left(1 + \frac{1}{x}\right)^x$



Problem 3

Before you practice limits on your own, let's examine the behavior of one more function: $f(x) = \sin\left(\frac{1}{x}\right)$. Use the standard window, make sure your handheld is in radian measure and graph $f(x)$. After viewing the standard window, press **menu**, **window/zoom**, **zoom in**, and using the origin as the center, zoom in 4 times.

Discuss with a classmate what you notice about the function as the input values approach 0 and describe your results of the limit: $\lim_{x \rightarrow \infty} \sin\left(\frac{1}{x}\right)$

Practicing Limits

Evaluate the limit for each expression:

1. $\lim_{x \rightarrow 0} \frac{\sin(x)}{x}$ _____

2. $\lim_{x \rightarrow \infty} \frac{x-2}{2x+5}$ _____

3. $\lim_{x \rightarrow 0} \frac{|x|}{x}$ _____

4. $\lim_{x \rightarrow 0} \frac{\sin(5x)}{4x}$ _____

5. $\lim_{x \rightarrow -\infty} \frac{4x-1}{\sqrt{x^2+2}}$ _____


6. $\lim_{x \rightarrow 1} \frac{x^3-1}{x-1}$ _____

7. $\lim_{x \rightarrow 2} \left(\frac{1}{x-2} - \frac{4}{x^2-4} \right)$ _____



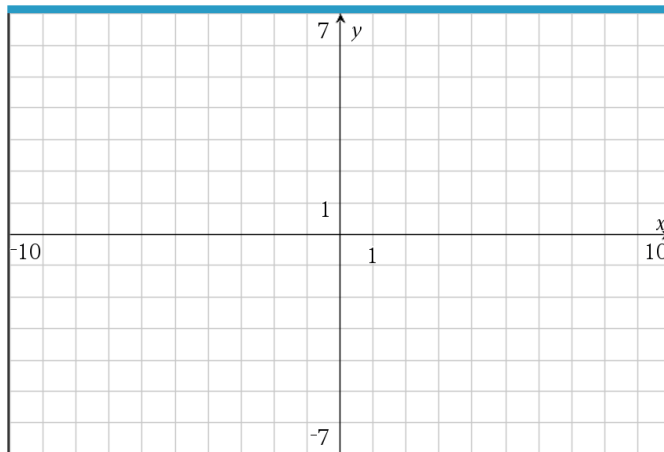
Further IB Applications

1. (a) Sketch the graph $y = \frac{x^2-4}{x-2}, x \neq 2$.



(b) Find $\lim_{x \rightarrow 2} \frac{x^2-4}{x-2}$ numerically.

2. (a) Consider the function $f(x) = \frac{3x}{x-2}, x \neq 2$. Sketch the function.



(b) Evaluate the limit: $\lim_{x \rightarrow \infty} \frac{3x}{x-2}$
